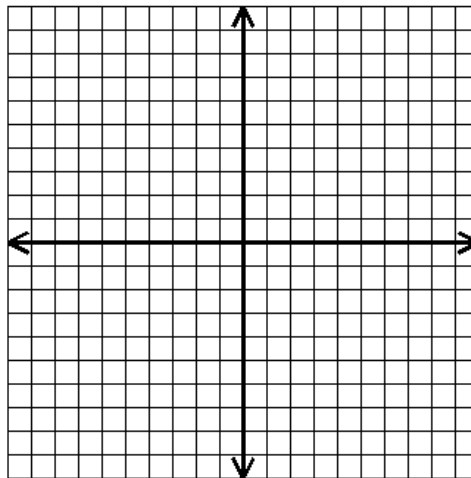


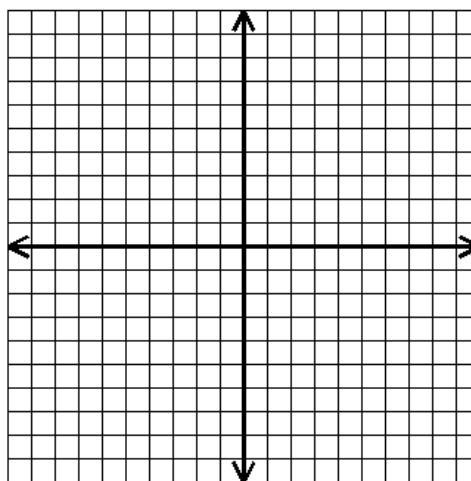
GRAPHING SYSTEMS OF INEQUALITIES

Graph the following systems of linear inequalities.

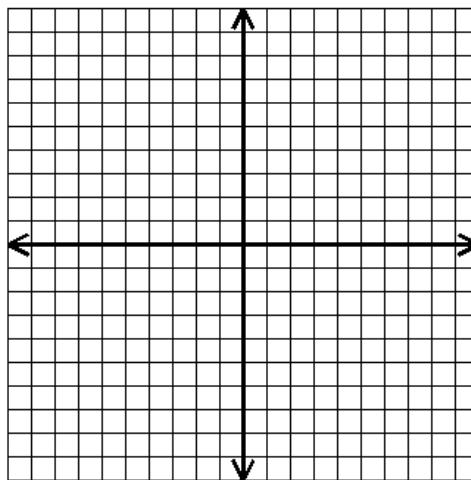
1) $y > -2x + 6$
 $y < x - 3$



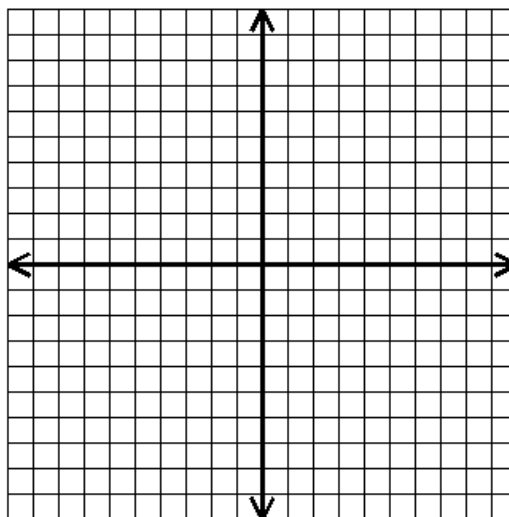
2) $y > x$
 $y > -2x + 5$



3) $y < 0.5x + 4$
 $y \leq -x - 4$



4) $x < 10$
 $y \geq \frac{3}{5}x - 2$



5) $x \geq -3$
 $y > 5$

